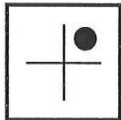
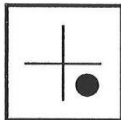
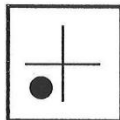

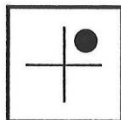
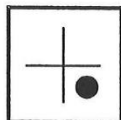

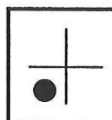

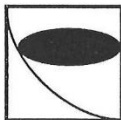
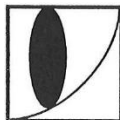

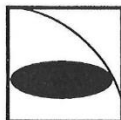
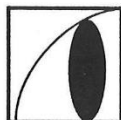

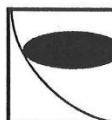
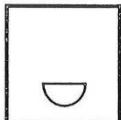

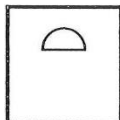

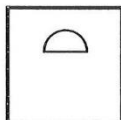

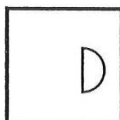
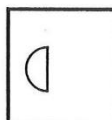




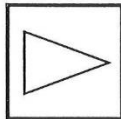
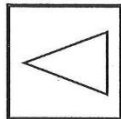

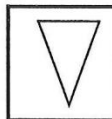
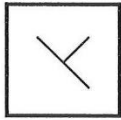
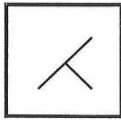
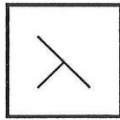

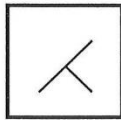
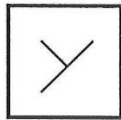
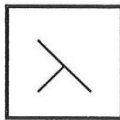
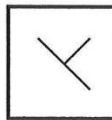








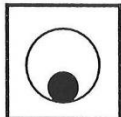



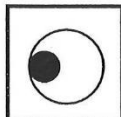
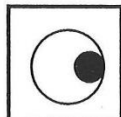

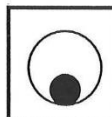


Links oder rechts herum

In jeder Zeile sind Zeichen oder Figuren, die von Kästchen zu Kästchen eine Drehung um 90 Grad machen, entweder im oder gegen den Uhrzeigersinn. Wie muss das Bild im leeren Kästchen aussehen – wie a, b, c oder d?

1					a 	b 	c 	d 
2					a 	b 	c 	d 
3					a 	b 	c 	d 
4					a 	b 	c 	d 
5					a 	b 	c 	d 
6					a 	b 	c 	d 
7					a 	b 	c 	d 

Lösung:

1: c

2: a

3: c

4: a

5: b

6: a

7: b